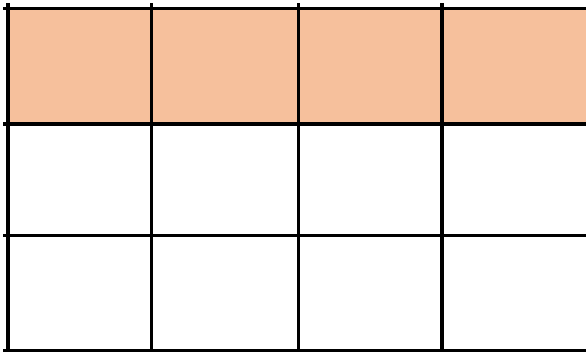


Quarter of a Quantity

4a. Tanya thinks she has coloured in one quarter of the squares. Is she correct?



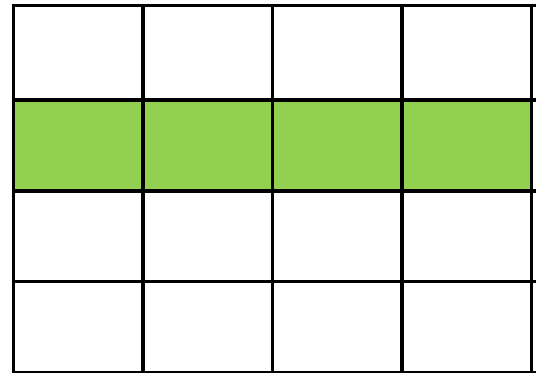
How do you know?



R

Quarter of a Quantity

4a. Awas thinks he has coloured in one quarter of the squares. Is he correct?




How do you know?



R

5a. Pirate Paul needs to put one quarter of his gems in his treasure chest.



I have put 8 of my gems in my treasure chest.



What mistake has Pirate Paul made?



R

5b. Pirate Padma needs to put one quarter of her coins in her treasure chest.



I have put 4 of my coins in my treasure chest.

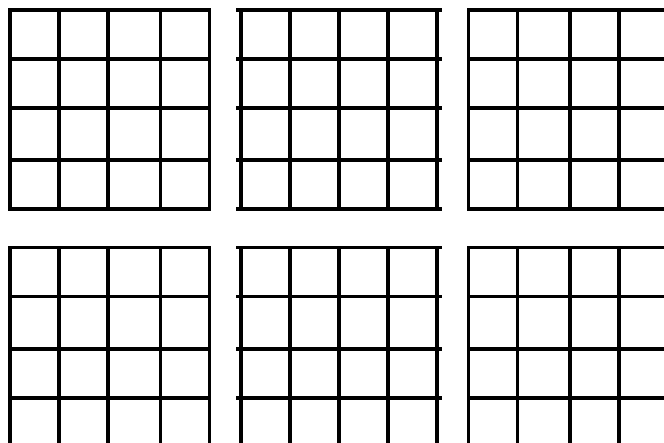


What mistake has Pirate Padma made?




R

6a. Find six different ways to shade a quarter of the shapes.



PS

6b. Find four different ways to shade a quarter of the shapes.



PS