


Quarter of a Quantity

5a. Complete the statement based on the picture below.



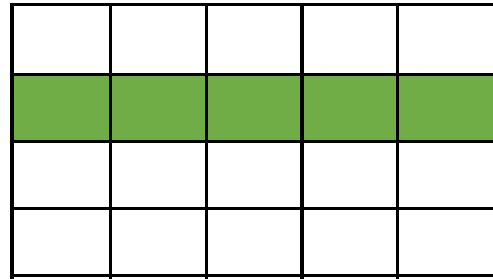
There are _____ gems. One quarter of _____ is _____.



VF

Quarter of a Quantity

5b. Complete the statement based on the picture below.




There are _____ boxes. One quarter of _____ is _____.



VF

6a. Use the counters to complete the statement.




One quarter of 12 is _____.



VF

6b. Use the counters to complete the statement.




One quarter of 16 is _____.




VF

7a. Here is one quarter. What is the total?




VF

7b. Here is one quarter. What is the total?



VF

8a. Colour one quarter of the squares.



VF

8b. Colour one quarter of the triangles.

