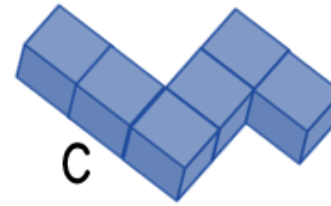
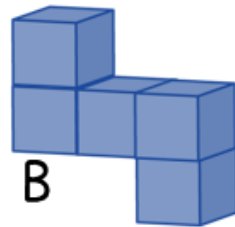
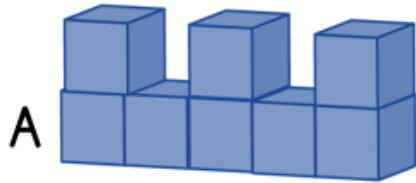


1) Put the shapes in ascending order of volume.



2)  $\frac{1}{4}$  of an hour is equal to  minutes.

3) How many km are the same as 3,217 m?

4) What number comes next in the sequence?

879, 889, 899, \_\_\_\_\_