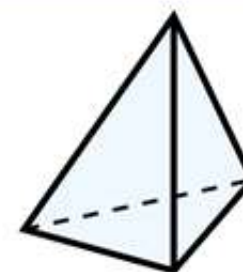
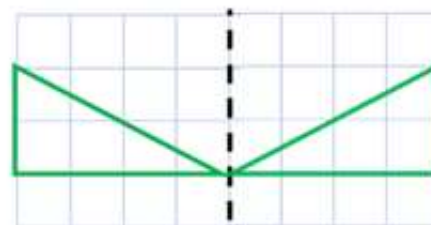


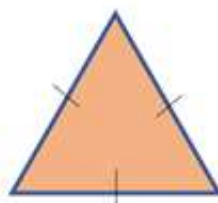
# Flashback 4

Year 4

- 1) Is the shape reflected correctly? **Yes**



- 2) What type of triangle is this? **equilateral**



- 3) What type of angle measures 90 degrees exactly?

**right angle**

- 4) Calculate the product of 16 and 4 **64**