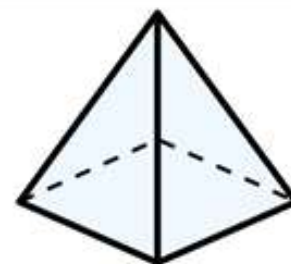
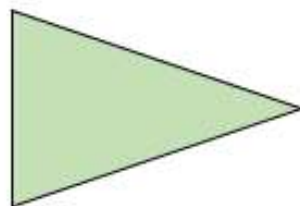
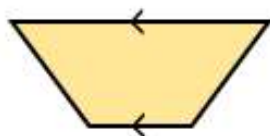


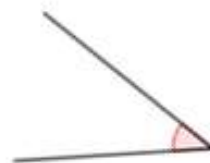
- 1) How many lines of symmetry does this triangle have?



- 2) What is the mathematical name for this shape?



- 3) What type of angle is this?



- 4) Calculate $4 \times 7 \times 5$