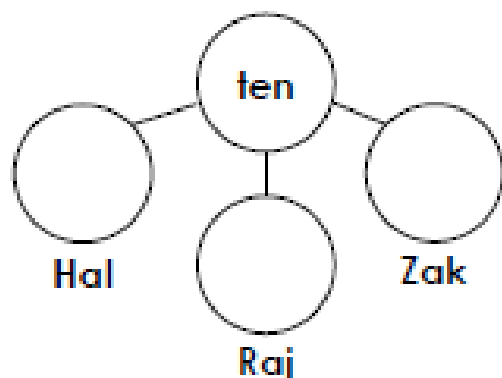


Part Whole Model

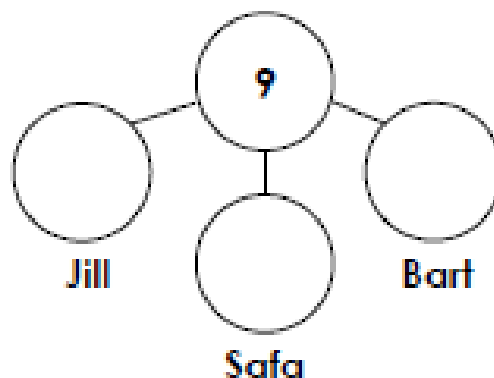
7a. Hal has least counters.
Raj and Zak both have more than Hal.
Fill in the missing parts.





PS

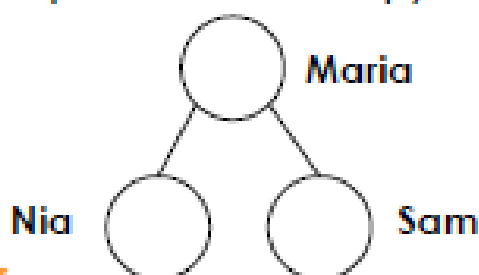
Part Whole Model

7b. Jill has most counters.
Safa and Bart both have fewer than Jill.
Fill in the missing parts.





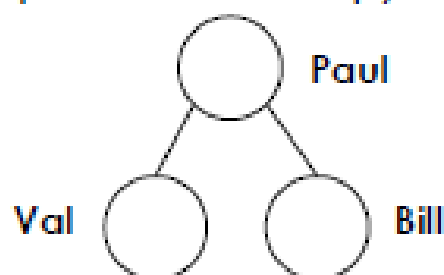
PS

8a. Maria has 7 lollipops. 
She gives three to Nia. 
How many does Sam get?
Use a part whole model to help you.



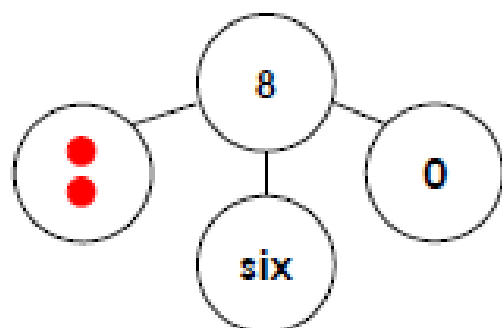
PS

8b. Paul has 8 apples. 
He gives 2 to Val. 
How many does Bill get?
Use a part whole model to help you.



PS

9a. Dani says,
My part whole model is correct.

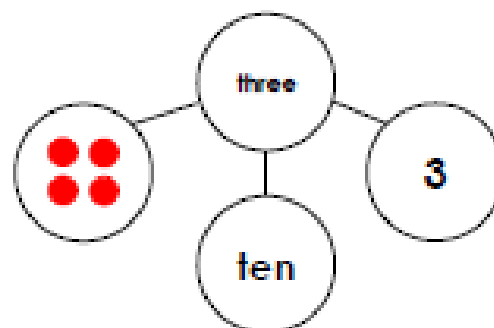


Is Dani right? Explain how you know.



R

9b. Wez says;
My part whole model is correct.



Is Wez right? Explain how you know.



R